

WORD PROBLEMS

addition and subtraction worksheets

FALL

WINTER

SPRING

SUMMER

Over 150
Problems

Watering Plants

Name _____

Kai watered 6 plants on Saturday. He watered some more on Sunday. How many plants:



My equation:
 $6 + 4 =$

Little Umbrellas

Name _____

One rainy day, there were 9 umbrellas on the grass. 6 of them blew away in the wind. How many umbrellas are still on the grass?



My equation:
 $9 - 6 = 3$

Catching Butterflies

Name _____

Chris caught 3 butterflies in the morning and 3 more butterflies after school. How many butterflies catch in all?



My equation:
 $3 + 3 = 6$

HANDS-ON LEARNING

Name _____

Finding Seashells



I found _____ seashells in the morning
and _____ more after school. Now I
_____ seashells altogether.




OVER 150 ENGAGING STORY PROBLEMS

EASY TO PREP and ENGAGING

Name _____ **Watering Plants**

Kai watered 6 plants on Saturday. He watered some more on Sunday. Altogether, Kai watered 10 plants. How many plants did he water on Sunday?



My equation:

$$\underline{6} + \underline{4} = \underline{10}$$

My answer:

4 plants

Name _____

Name _____


At the Beach

Jon found 5 seashells in the sand. Then he found 3 more. How many seashells did he find in all?



Mittens in the Bag

Bear added some mittens to the bag. Bear added some more. How many mittens in all. How many



Name _____

At the Pumpkin Patch
Tom saw 9 pumpkins at the pumpkin patch. 6 of them were taken home. How many pumpkins are still in the

Name _____

Crunching Carrots




Rabbit dug up _____ carrots. She ate _____ for lunch. Now she has _____ carrots left.

My equation:

$$\underline{\quad} - \underline{\quad} = \underline{\quad}$$

My answer:

_____ pumpkins




Miss
kindergarten

NO-PREP REAL-WORLD ADDITION AND SUBTRACTION PROBLEMS


SEASONAL STORY PROBLEMS TO USE ALL YEAR LONG

Mittens
Name _____
There were 2 mittens in the bag. Bear found 4 more. Now there are 6 mittens in the bag. How many mittens did Bear add?



My equation:
+ =


Crunks
Name _____
A rabbit dug up 3 carrots for lunch. Now there are 7 carrots left in the garden. How many carrots were there to begin with?



Rabbit dug up _____ carrots for lunch. Now there are _____ carrots left in the garden. How many carrots were there to begin with?

My equation:
- =


Seashells
Name _____
Jon found 5 seashells in the sand. He gave 2 to his friend. How many seashells did he have left?



Jon found 5 seashells in the sand. He gave 2 to his friend. How many seashells did he have left?


My equation:
+ =

At the Pumpkin Patch
Name _____
Tom saw 9 pumpkins at the pumpkin patch. 6 of them were taken home. How many pumpkins are still in the patch?



My equation:
- =


My answer:
_____ pumpkins



STORY PROBLEMS HAVE NEVER BEEN SO ENGAGING

BUNDLE & SAVE!

Get everything you need to incorporate addition and subtraction into your classroom this school year!



MATH BUNDLE ADDITION & SUBTRACTION

